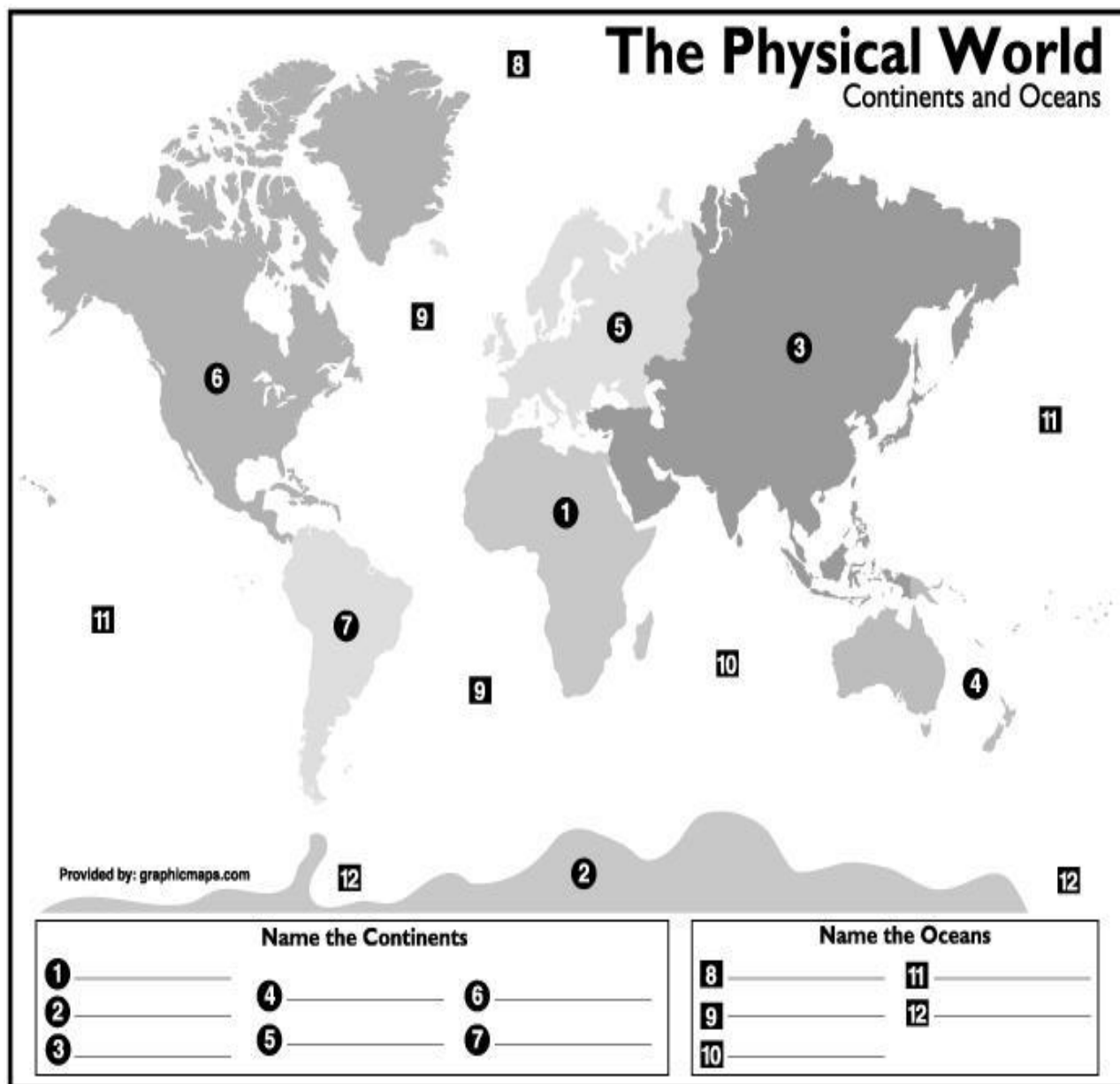


1. World Continents and Oceans

Objective: Students will be able to identify and label each of the world continents and oceans when provided a blank map of the world.

Continents: Africa, Antarctica, Asia, Australia, Europe, North America, South America

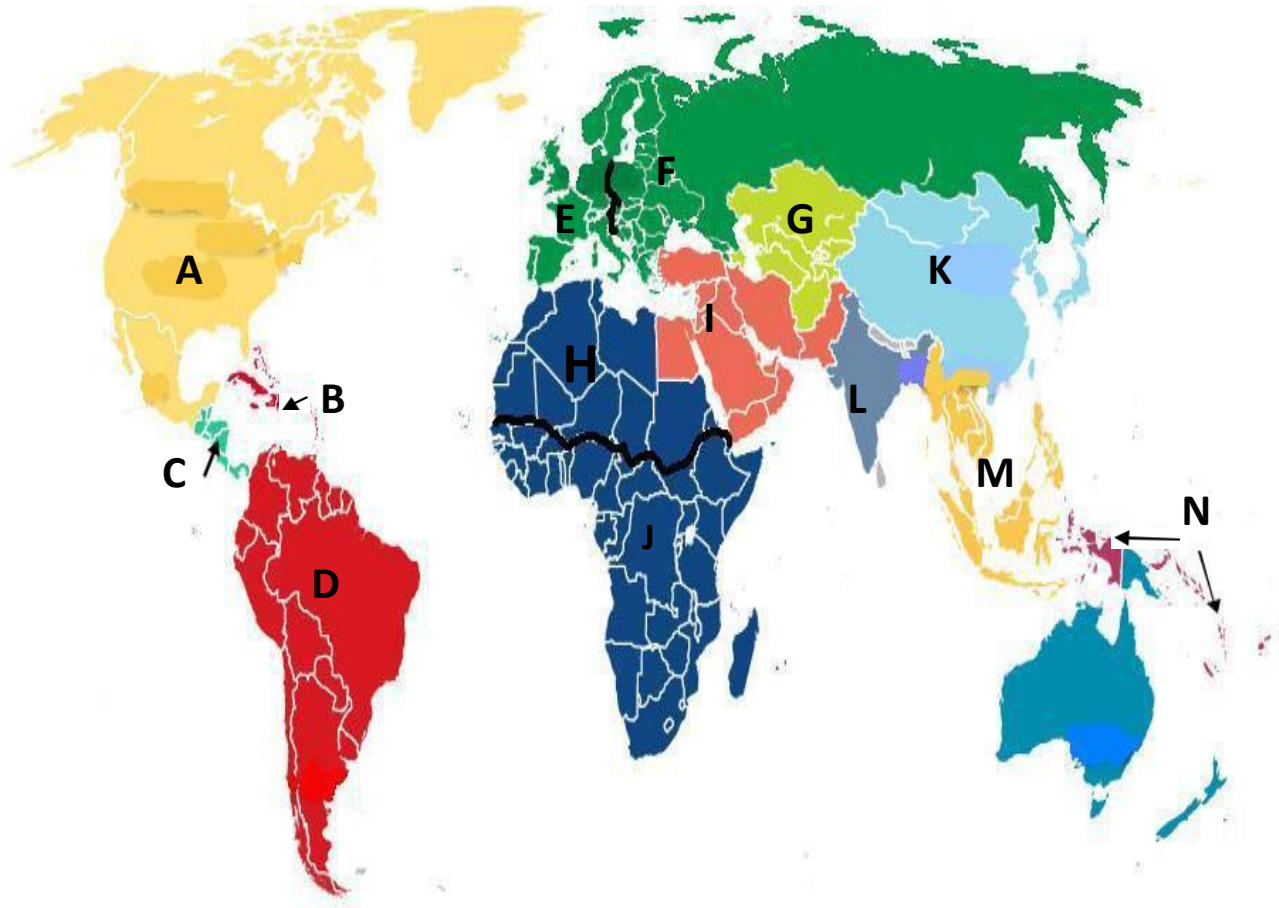
Oceans: Arctic, Atlantic, Indian, Pacific, Southern



2. Regions of the World

Objective: Students will be able to identify and label each of the major regions of the world when provided a blank map of the world.

Regions: Identify each of the following regions: Caribbean, Central America, Central Asia, East Asia, Eastern Europe, Middle East (aka Southwest Asia), North Africa, North America, Australia/Oceania, South America (aka Latin America), South Asia, Southeast Asia, Sub-Saharan Africa, Western Europe



A. _____

B. _____

C. _____

D. _____

E. _____

F. _____

G. _____

H. _____

I. _____

J. _____

K. _____

L. _____

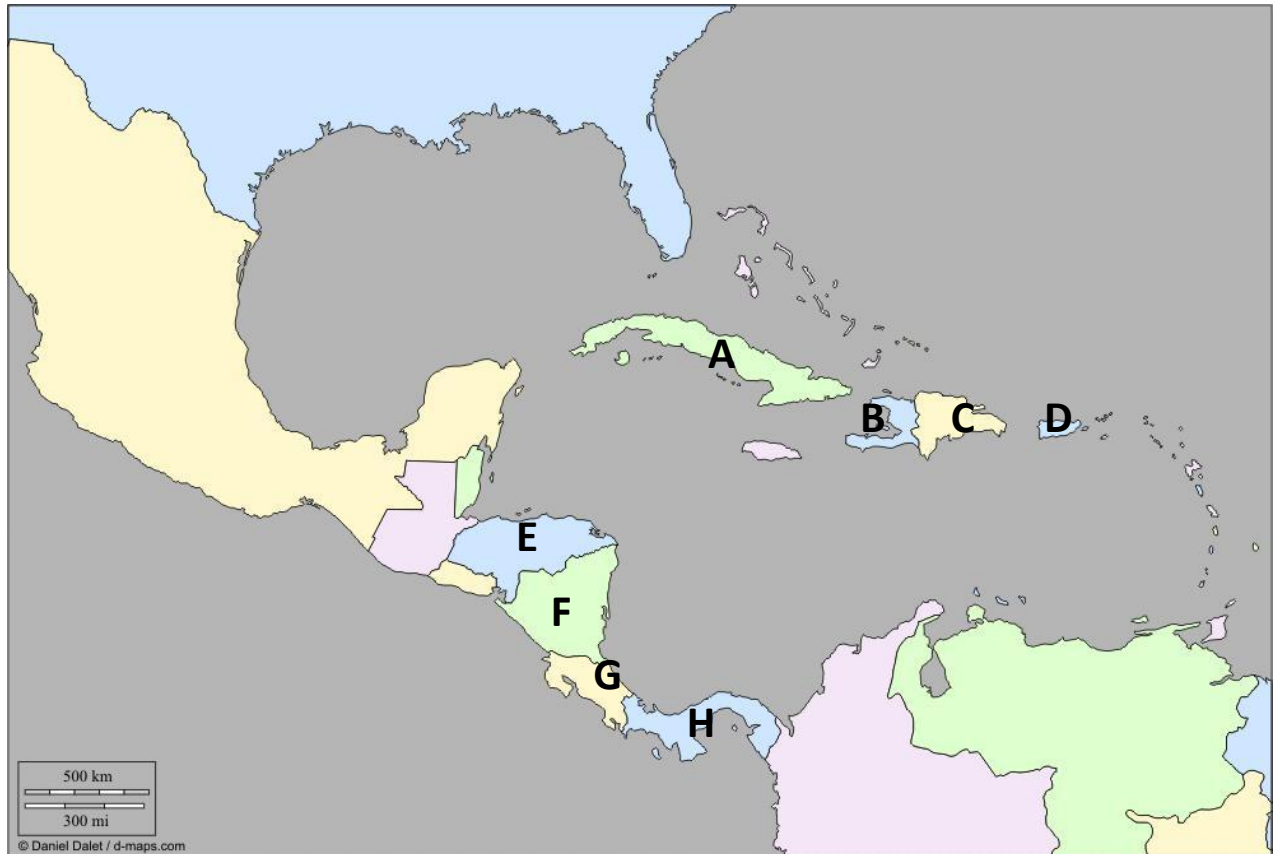
M. _____

N. _____

3. Countries of the Central American and Caribbean Regions

Objective: Students will be able to identify and label a selection of countries found within each of the major regions of the world when provided a blank map of the world.

Countries: Identify each of the following: Costa Rica, Cuba, Dominican Republic, Haiti, Honduras, Nicaragua, Panama, Puerto Rico*



*Puerto Rico is a commonwealth of the United States

A. _____

B. _____

C. _____

D. _____

E. _____

F. _____

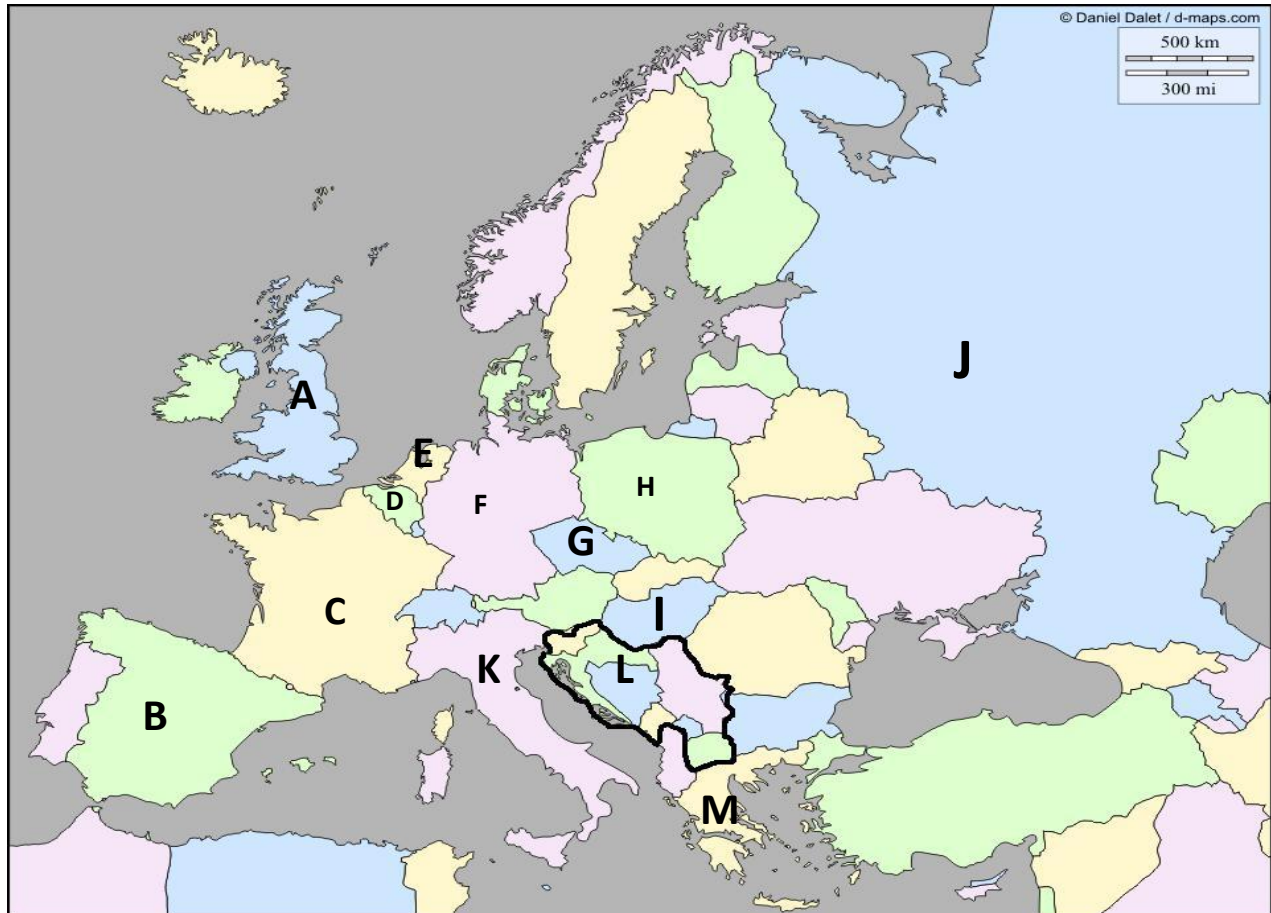
G. _____

H. _____

4. Countries of the Eastern and Western European Regions

Objective: Students will be able to identify and label a selection of countries found within each of the major regions of the world when provided a blank map of the world.

Countries: Identify each of the following: Belgium, Czech Republic, France, Germany, Greece, Hungary, Italy, Netherlands, Poland, Russia, Spain, United Kingdom, the Former Yugoslavia*



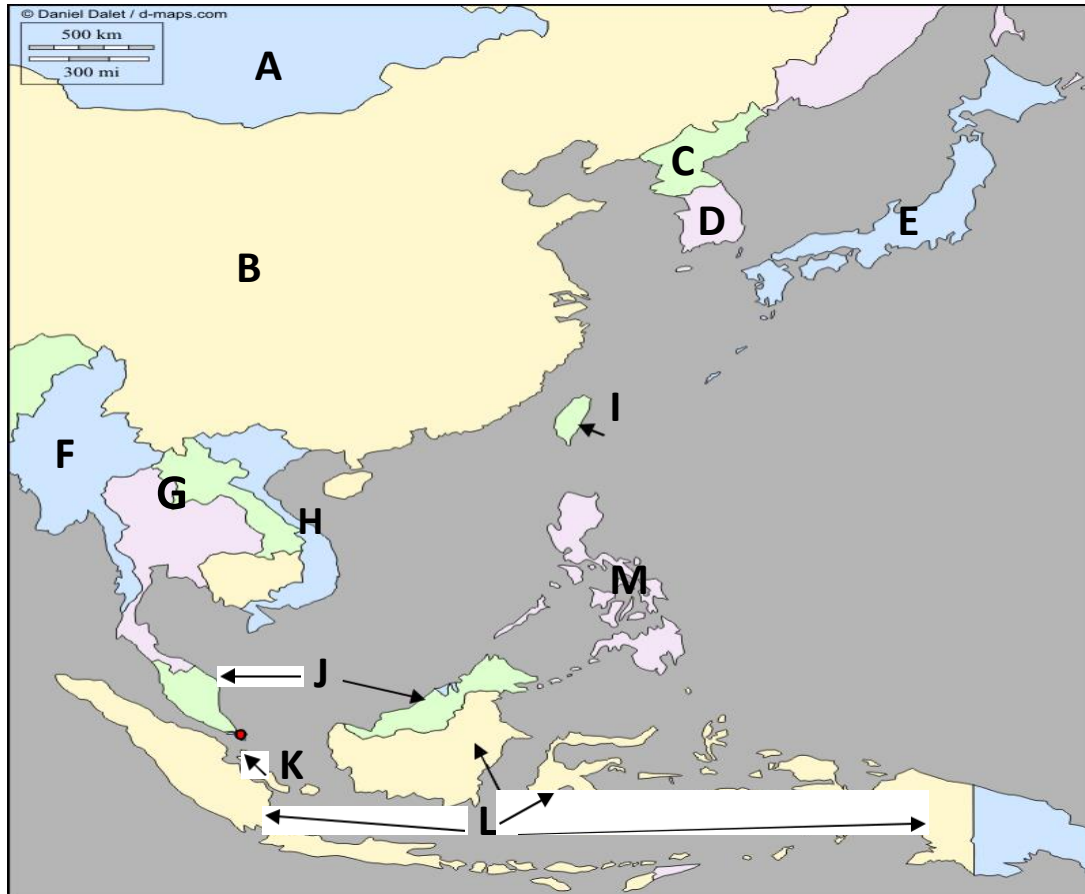
*The Former Yugoslavia is today comprised of several countries: Bosnia-Herzegovina, Croatia, Kosovo (recognized by the United States and European Union), Macedonia, Montenegro, Serbia, and Slovenia.

- | | | |
|----------|----------|----------|
| A. _____ | B. _____ | C. _____ |
| D. _____ | E. _____ | F. _____ |
| G. _____ | H. _____ | I. _____ |
| J. _____ | K. _____ | L. _____ |
| M. _____ | | |

5. Countries of the East Asian and Southeast Asian Regions

Objective: Students will be able to identify and label a selection of countries found within each of the major regions of the world when provided a blank map of the world.

Countries: Identify each of the following: China, Indonesia, Japan, Malaysia, Mongolia, Myanmar (Burma), North Korea, Philippines, Singapore, South Korea, Taiwan*, Thailand, Vietnam



*Taiwan is an independently governed territory claimed by China.

A. _____

B. _____

C. _____

D. _____

E. _____

F. _____

G. _____

H. _____

I. _____

J. _____

K. _____

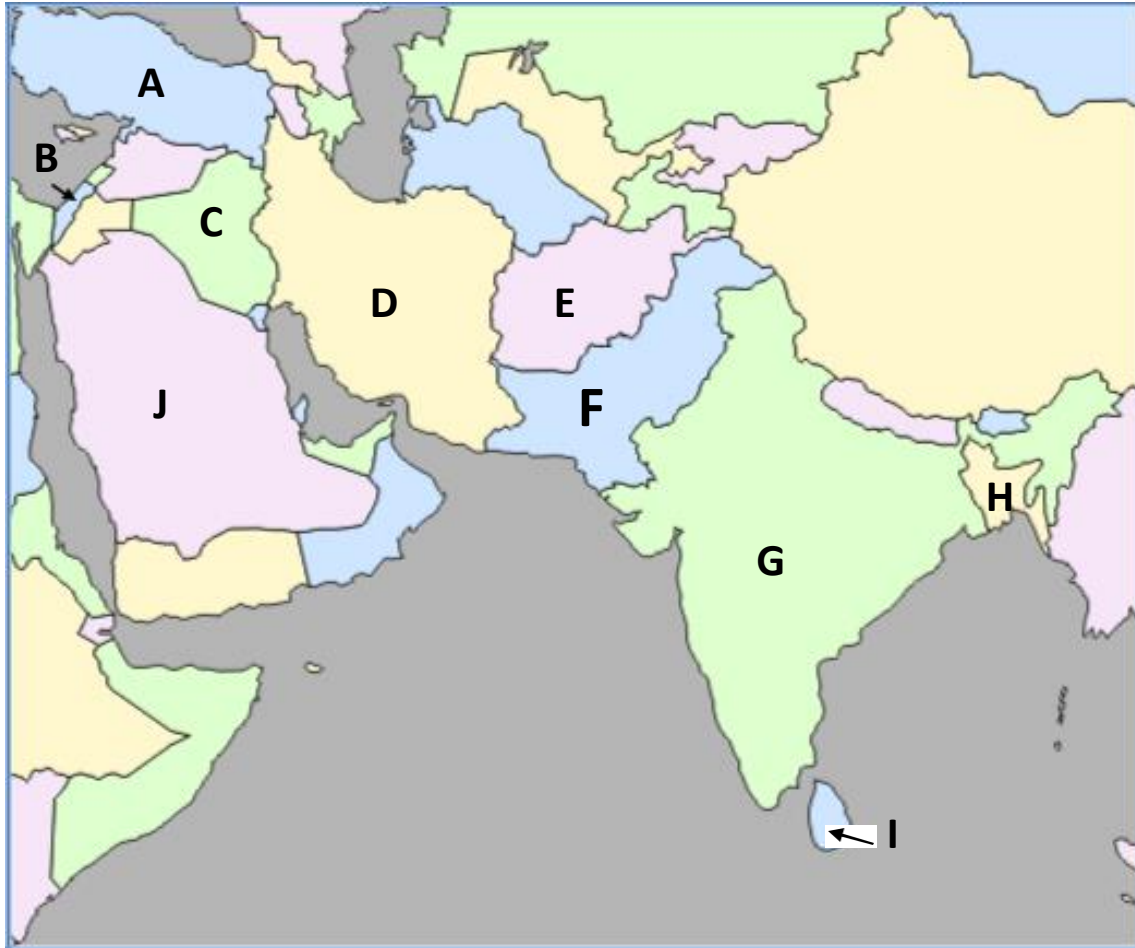
L. _____

M. _____

6. Countries of the Middle East (or Southwest Asia) and South Asian Regions

Objective: Students will be able to identify and label a selection of countries found within each of the major regions of the world when provided a blank map of the world.

Countries: Identify the following: Afghanistan, Bangladesh, India, Iran, Iraq, Israel, Pakistan, Saudi Arabia, Sri Lanka, Turkey



A. _____

B. _____

C. _____

D. _____

E. _____

F. _____

G. _____

H. _____

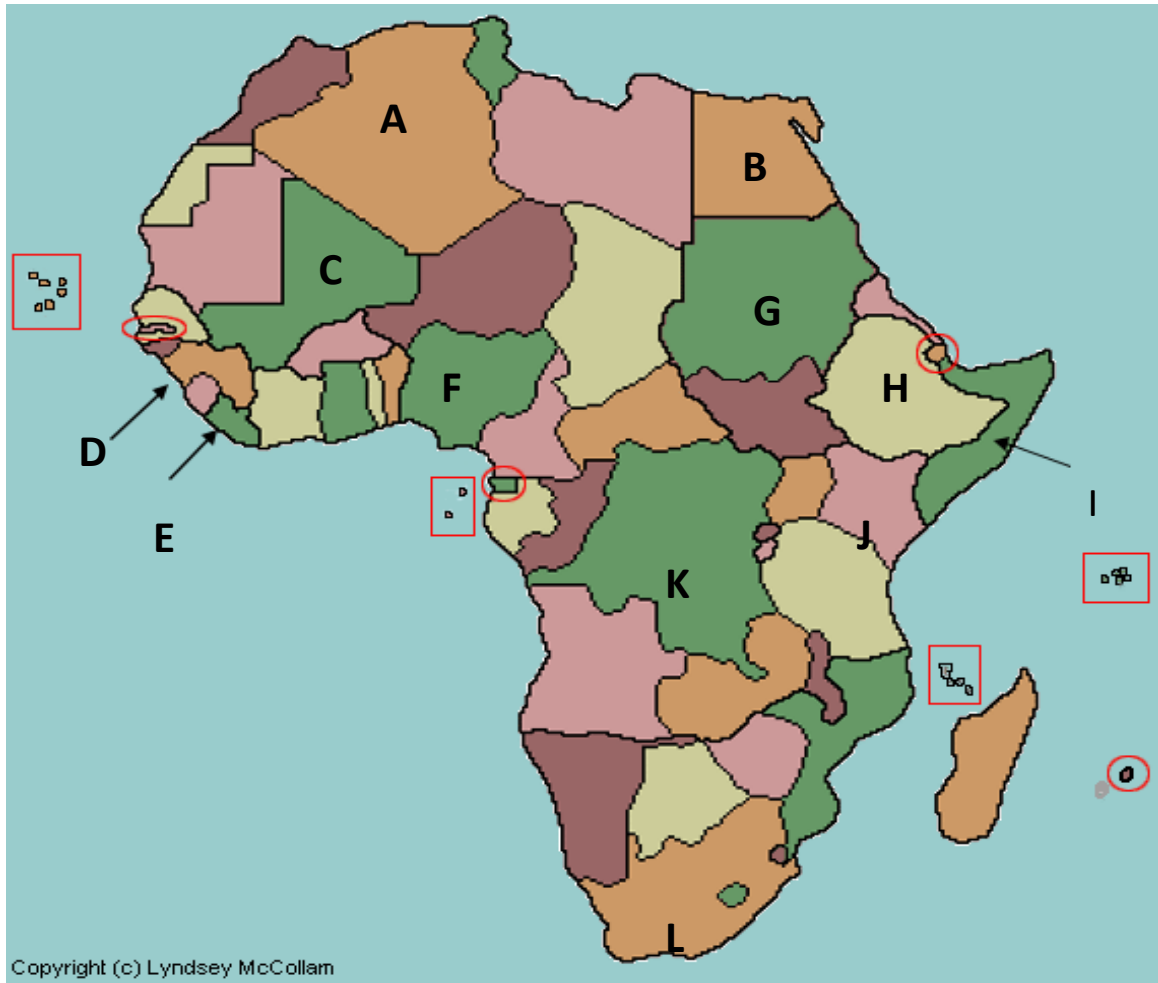
I. _____

J. _____

7. Countries of the North African and Sub-Saharan Regions

Objective: Students will be able to identify and label a selection of countries found within each of the major regions of the world when provided a blank map of the world.

Countries: Identify each of the following: Algeria, Democratic Republic of Congo, Egypt, Ethiopia, Kenya, Liberia, Mali, Nigeria, Sierra Leone, Somalia, South Africa, Sudan



A. _____

B. _____

C. _____

D. _____

E. _____

F. _____

G. _____

H. _____

I. _____

J. _____

K. _____

L. _____

8. Countries of the South American Region

Objective: Students will be able to identify and label a selection of countries found within each of the major regions of the world when provided a blank map of the world.

Countries: Identify each of the following: Argentina, Brazil, Chile, Colombia, Peru, Venezuela



A. _____

B. _____

C. _____

D. _____

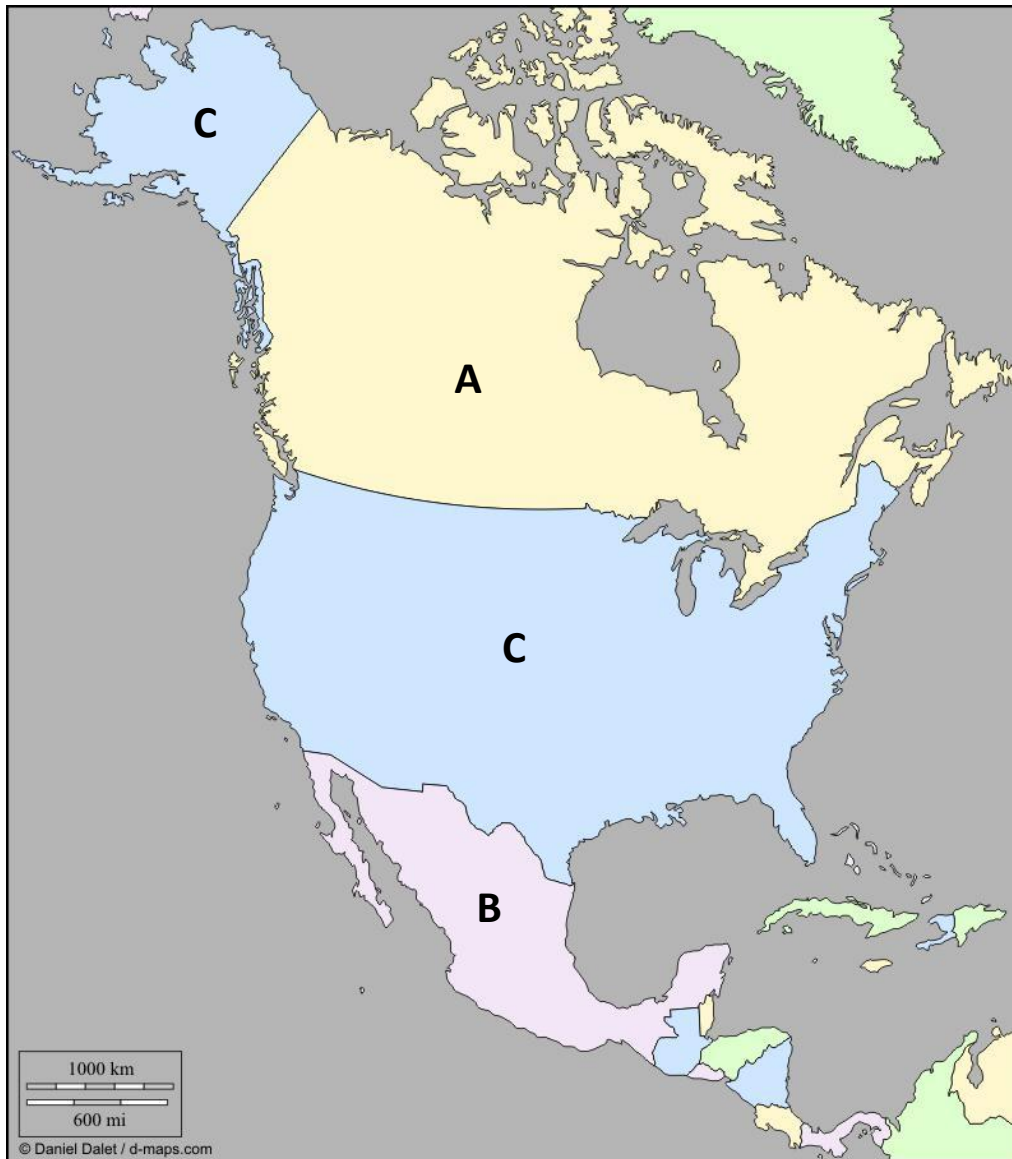
E. _____

F. _____

9. Countries of the North American Region

Objective: Students will be able to identify and label a selection of countries found within each of the major regions of the world when provided a blank map of the world.

Countries: Identify each of the following: Canada, Mexico, United States



A. _____

B. _____

C. _____

10. States of the United States

Objective: Students will be able to identify and label a selection of states comprising the United States when provided a blank map of the United States.

States: Identify all of the 50 states.

